

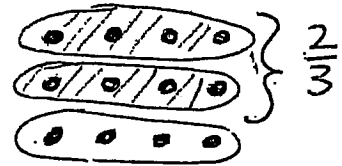
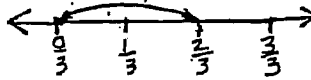
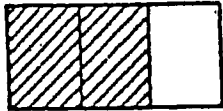
# Fraction Representations and Models

Area

Number Line

Set

$$\frac{2}{3} =$$



$$\frac{1}{4} =$$

$$\frac{3}{4} =$$

$$\frac{5}{8} =$$

$$\frac{4}{5} =$$

$$\frac{2}{7} =$$

$$\frac{5}{7} =$$